


## F2 Home Learning

## Shape, Space and Measure


Tuesday 5<sup>th</sup> May 2020:

 **Maths Homework Challenge!**

**Measure the height of the kitchen work top using a pen.**

How many pens high is it?  
Write the number.

Guess the length of your bed in pens.  
Measure the length and write the number.




Card 30

What can you find in the kitchen that is 'shorter'?

How do you know?

Can you find things that are the SAME height?

Thursday 7<sup>th</sup> May 2020:


 **Maths Homework Challenge!**

**Find 3 objects that are smaller than this circle and 3 that are bigger.**

Which was the largest thing you found?

Which was the heaviest?

Draw a picture of the smallest object.




Card 27

Could you fit inside this circle?

Are there any parts of your body that could?

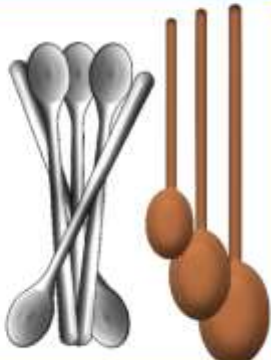
Friday 8<sup>th</sup> May 2020:

 **Maths Homework Challenge!**

**Find as many different spoons as you can. Line them up in order of size.**

Draw a picture of the largest spoon.

How many spoons did you find?  
Write the number.



Card 24